


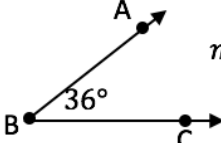
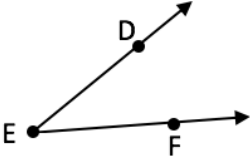


BASIC GEOMETRY NOTATION

Directions: For each of the given geometric notations below, draw and label the figure and write the name of the figure out in words in the right hand column. The first one is done for you.

Notation	Diagram & Name of Figure
\overleftrightarrow{AC}	<p>Line AC</p> 
\overrightarrow{AB}	<p>Ray AB</p> 
\overline{BC}	<p>Line Segment BC</p> 
$m \angle ABC$	<p>The measure of angle ABC.</p>  <p>$m \angle ABC = 36^\circ$</p>
$\angle DEF$	<p>Angle DEF</p> 
$\triangle SUN$	<p>Triangle SUN</p> 