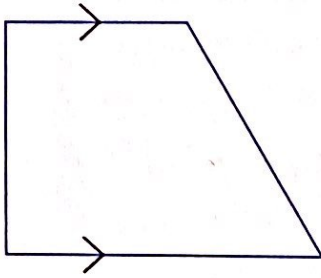


IDENTIFYING QUADRILATERALS

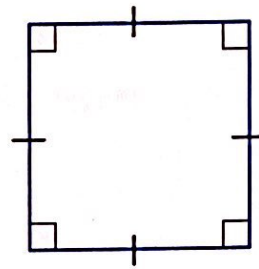
Directions: Determine whether the quadrilateral is a parallelogram, rhombus, square, rectangle, kite, trapezoid or isosceles trapezoid. Explain your reasoning.

1.



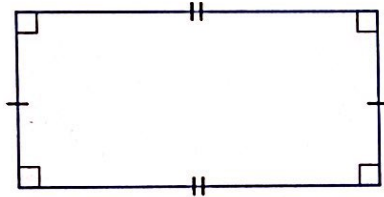
Trapezoid
* has exactly one pair of parallel sides.

2.



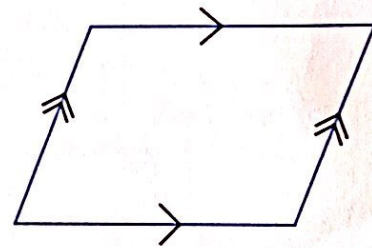
Square
* has four right angles and all sides are congruent

3.



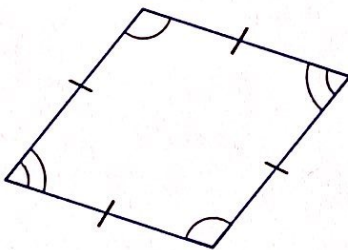
Rectangle
* has four right angles & opposite sides are congruent

4.



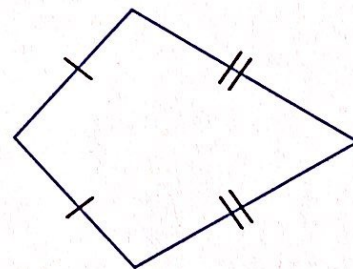
Parallelogram
* Opposite sides are parallel.

5.



Rhombus
* All sides are congruent & opposite angles are congruent.

6.



Kite
* has two pairs of adjacent legs that are congruent.